

Level 2

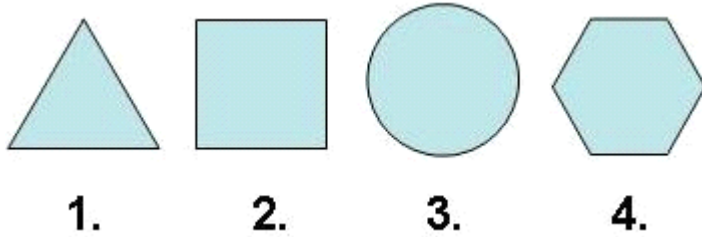
For office use only														
A1	Individual questionnaire number							A2	Household questionnaire number					
A3	Household control sheet number							A4	Pcode from household roster					

- $(11 - 5) + 2 \times (21 - 17) =$
 - 2
 - 10
 - 14
 - 31
- What is the place value of 7 in 738 / Kemopalo ya 7 go 738 ke bokae
 - 1
 - 10
 - 100
 - 1000
- $4 \times 7 =$
 - 4
 - 7
 - 18
 - 28
- If $3 + ? = 16$, which number should replace? / Ge e gore $3 + ? = 16$, ke nomoro efe yeo e swanetšego go emelwa ke?
 - 10
 - 11
 - 13
 - 24
- Which number continues the pattern? Ke nomoro efe yeo e tšwelago pele le phethene?


1 2 2 3 3 3 4 4 4 4 ?

 - 4
 - 5
 - 6
 - 7

6. Which shape is the odd one out. / Ke sebopego sefe seo se tšwelego.



7. What is the time difference between these two watches? / Phapano ya nako ke efe magareng ga dišupanako tše pedi?



- a) 4 min/ metsotso ye 4
- b) 1 h 4 min/ iri le metsotso ye 4
- c) 6 min/ metsotso ye 6
- d) 1 h 6 min/ iri le metsotso ye 6

8. Which one is the heaviest? / Ke efe yeo e nonnogo go feta tše dingwe?



a)



b)



c)




d)

9. 1cm = ?

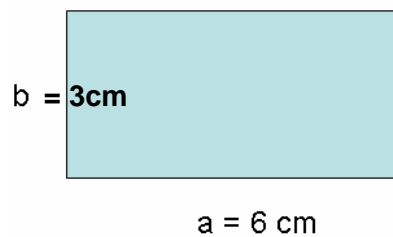
- a) 10 mm
- b) 100 mm
- c) 1000 mm
- d) 10000 mm

10. How many sides does this object have?




- a) 4
- b) 5
- c) 6
- d) 7

11. If $a = 6\text{ cm}$ and $b = 3\text{ cm}$ find the perimeter of the rectangle below. / Ge e le gore $a = 6\text{ cm}$ gomme $b = 3\text{ cm}$ humana modikologo wa khutlonnethwii ye e lego ka fase



- a) 9 cm
- b) 12 cm
- c) 15 cm
- d) 18 cm

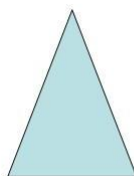
12. If this cylinder was cut using a vertical plane. / Ge e le gore silintere e segilwe go šomišwa sekhafofotsepa



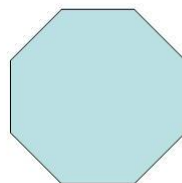
What would be the shape of the cut surface? / Sebopego sa bokagodimo bjo bo segilwego e ka ba eng?




a)



b)



c)



d)

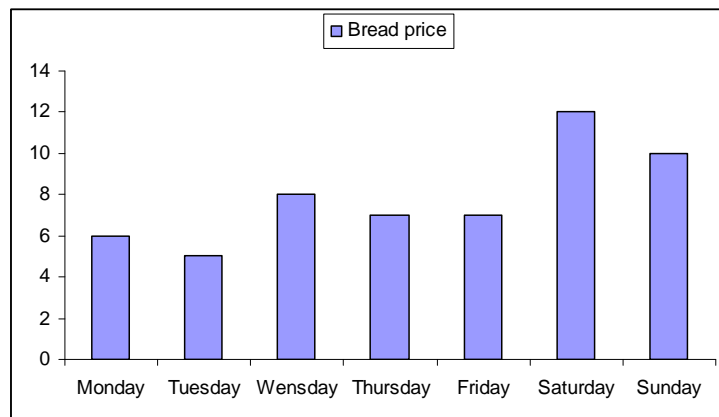
13. Which city had the hottest temperature? / Ke toropo efe yeo e nago le themphereitšha ya go fiša go feta?

City/ Toropo	Temperature / Themphereitšha ° C
Cape Town/Kapa	25
Johannesburg	24
Harare	20
Nairobi	22

- a) Cape Town/ Kapa
b) Johannesburg
c) Harare
d) Nairobi
14. Find the mean (average) of the following series of numbers: /
Humana palogare ye tatelano ya dinomoro tše di latelago:
13, 17, 20, 40, 40

- a) 20
b) 26
c) 30
d) 40

15. Which day is best to buy the bread? / Ke letšatši lefe leo le lego kaone go reka borotheo?



- a) Monday / Mošupologo
b) Tuesday / Labobedi
c) Thursday / Labone
d) Sunday / Lamorena